

# Penyelesaian Lengkap

## Praktis 2

### Praktis Formatif

$$1 \text{ (a) } \lim_{x \rightarrow 1} (x-1) / \lim_{x \rightarrow 1} (x-1) = 1 - 1 = 0$$

$$(b) \lim_{x \rightarrow 2} \frac{x^2 - 2}{x} / \lim_{x \rightarrow 2} \frac{x^2 - 2}{x} = \frac{2^2 - 2}{2} = 1$$

$$(c) \lim_{x \rightarrow 0} \frac{2x - 5}{x + 3} / \lim_{x \rightarrow 0} \frac{2x - 5}{x + 3} = \frac{2(0) - 5}{(0) + 3} = -\frac{5}{3}$$

$$(d) \lim_{x \rightarrow a} (x^2 - 2ax) / \lim_{x \rightarrow a} (x^2 - 2ax) = a^2 - 2a(a) = -a^2$$

$$2 \text{ (a) } \lim_{x \rightarrow -2} \frac{\frac{7}{x} + \frac{7}{2}}{x + 2} / \lim_{x \rightarrow -2} \frac{\frac{7}{x} + \frac{7}{2}}{x + 2} = \lim_{x \rightarrow -2} \frac{14 + 7x}{2x(x + 2)} / \lim_{x \rightarrow -2} \frac{14 + 7x}{2x(x + 2)} = \frac{7}{2(-2)} = -\frac{7}{4}$$

$$(b) \lim_{x \rightarrow 2} \frac{x^2 - 4}{x - 2} / \lim_{x \rightarrow 2} \frac{x^2 - 4}{x - 2} = \lim_{x \rightarrow 2} \frac{(x + 2)(x - 2)}{x - 2} / \lim_{x \rightarrow 2} \frac{(x + 2)(x - 2)}{x - 2} = 2 + 2 = 4$$

$$(c) \lim_{x \rightarrow 5} \frac{x^2 + 4x - 45}{x - 5} / \lim_{x \rightarrow 5} \frac{x^2 + 4x - 45}{x - 5} = \lim_{x \rightarrow 5} \frac{(x - 5)(x + 9)}{x - 5} / \lim_{x \rightarrow 5} \frac{(x - 5)(x + 9)}{x - 5} = \lim_{x \rightarrow 5} (x + 9) / \lim_{x \rightarrow 5} (x + 9) = 5 + 9 = 14$$

$$3 \text{ (a) } \lim_{x \rightarrow 9} \frac{\sqrt{x} - 3}{x - 9} / \lim_{x \rightarrow 9} \frac{\sqrt{x} - 3}{x - 9} = \lim_{x \rightarrow 9} \frac{(\sqrt{x} - 3)(\sqrt{x} + 3)}{(x - 9)(\sqrt{x} + 3)} / \lim_{x \rightarrow 9} \frac{(\sqrt{x} - 3)(\sqrt{x} + 3)}{(x - 9)(\sqrt{x} + 3)} = \lim_{x \rightarrow 9} \frac{(x - 9)}{(x - 9)(\sqrt{x} + 3)} / \lim_{x \rightarrow 9} \frac{(x - 9)}{(x - 9)(\sqrt{x} + 3)} = \lim_{x \rightarrow 9} \frac{1}{(\sqrt{x} + 3)} / \lim_{x \rightarrow 9} \frac{1}{(\sqrt{x} + 3)} = \frac{1}{6}$$

$$(b) \lim_{x \rightarrow 2} \frac{\sqrt{6-x} - 2}{3 - \sqrt{11-x}} / \lim_{x \rightarrow 2} \frac{\sqrt{6-x} - 2}{3 - \sqrt{11-x}} = \lim_{x \rightarrow 2} \frac{(\sqrt{6-x} - 2)(3 + \sqrt{11-x})}{(3 - \sqrt{11-x})(3 + \sqrt{11-x})} / \lim_{x \rightarrow 2} \frac{(\sqrt{6-x} - 2)(3 + \sqrt{11-x})}{(3 - \sqrt{11-x})(3 + \sqrt{11-x})} = \lim_{x \rightarrow 2} \frac{(\sqrt{6-x} - 2)(3 + \sqrt{11-x})}{9 - (11-x)} / \lim_{x \rightarrow 2} \frac{(\sqrt{6-x} - 2)(3 + \sqrt{11-x})}{9 - (11-x)} = \lim_{x \rightarrow 2} \frac{(\sqrt{6-x} - 2)(3 + \sqrt{11-x})(\sqrt{6-x} + 2)}{(x - 2)(\sqrt{6-x} + 2)} / \lim_{x \rightarrow 2} \frac{(\sqrt{6-x} - 2)(3 + \sqrt{11-x})(\sqrt{6-x} + 2)}{(x - 2)(\sqrt{6-x} + 2)} = \lim_{x \rightarrow 2} \frac{(6-x-4)(3 + \sqrt{11-x})}{(x-2)(\sqrt{6-x} + 2)} / \lim_{x \rightarrow 2} \frac{(6-x-4)(3 + \sqrt{11-x})}{(x-2)(\sqrt{6-x} + 2)} = \lim_{x \rightarrow 2} \frac{-(x-2)(3 + \sqrt{11-x})}{(x-2)(\sqrt{6-x} + 2)} / \lim_{x \rightarrow 2} \frac{-(x-2)(3 + \sqrt{11-x})}{(x-2)(\sqrt{6-x} + 2)} = \lim_{x \rightarrow 2} \frac{-(3 + \sqrt{11-x})}{(\sqrt{6-x} + 2)} / \lim_{x \rightarrow 2} \frac{-(3 + \sqrt{11-x})}{(\sqrt{6-x} + 2)} = \frac{-(3 + \sqrt{11-2})}{(\sqrt{6-2} + 2)} = \frac{-6}{4} = \frac{3}{2}$$

$$4 \text{ (a) } f(4) = 3$$

$$(b) \lim_{x \rightarrow 4} f(x) / \lim_{x \rightarrow 4} f(x) = \text{tidak wujud/does not exist}$$

Had kiri dan had kanan bagi fungsi  $f(x)$  adalah tidak sama apabila  $x$  menghampiri 4.

*The left-hand limit and the right-hand limit of  $f(x)$  are different as  $x$  approaches 4.*

$$(c) \lim_{x \rightarrow 3^-} f(x) / \lim_{x \rightarrow 3^+} f(x) = 3$$

$$5 \text{ (a) } \begin{aligned} y &= 3x + 5 \\ y + \delta y &= 3(x + \delta x) + 5 \\ &= 3x + 3\delta x + 5 \\ \delta y &= 3\delta x \\ \frac{\delta y}{\delta x} &= 3 \end{aligned}$$

$$\frac{dy}{dx} \approx \text{had}_{\delta x \rightarrow 0} 3 / \lim_{\delta x \rightarrow 0} 3$$

$$\frac{dy}{dx} = 3$$

$$(b) \quad y = -x^3$$

$$y + \delta y = -(x + \delta x)^3$$

$$= -[x^3 + 3x^2 \delta x + 3x(\delta x)^2 + (\delta x)^3]$$

$$\delta y = -[3x^2 \delta x + 3x(\delta x)^2 + (\delta x)^3]$$

$$\frac{\delta y}{\delta x} = -[3x^2 + 3x \delta x + (\delta x)^2]$$

$$\frac{dy}{dx} \approx \text{had}_{\delta x \rightarrow 0} -[3x^2 + 3x \delta x + (\delta x)^2] /$$

$$\lim_{\delta x \rightarrow 0} -[3x^2 + 3x \delta x + (\delta x)^2]$$

$$\frac{dy}{dx} = -3x^2$$

$$(c) \quad y = \frac{5}{x^2}$$

$$y + \delta y = \frac{5}{(x + \delta x)^2}$$

$$\delta y = \frac{5}{x^2 + 2x \delta x + (\delta x)^2} - \frac{5}{x^2}$$

$$= \frac{5x^2 - 5x^2 - 10x \delta x - 5(\delta x)^2}{x^2[x^2 + 2x \delta x + (\delta x)^2]}$$

$$= \frac{-10x \delta x - 5(\delta x)^2}{x^2[x^2 + 2x \delta x + (\delta x)^2]}$$

$$\frac{\delta y}{\delta x} = \frac{-10x - 5\delta x}{x^2[x^2 + 2x \delta x + (\delta x)^2]}$$

$$\frac{dy}{dx} \approx \text{had}_{\delta x \rightarrow 0} \frac{-10x - 5\delta x}{x^2[x^2 + 2x \delta x + (\delta x)^2]}$$

$$\lim_{\delta x \rightarrow 0} \frac{-10x - 5\delta x}{x^2[x^2 + 2x \delta x + (\delta x)^2]}$$

$$\frac{dy}{dx} = \frac{-10x}{x^2(x)^2} = \frac{-10}{x^3}$$

$$6 (a) \quad y = x^2 - ax + b$$

$$y + \delta y = (x + \delta x)^2 - a(x + \delta x) + b$$

$$= x^2 + 2x\delta x + (\delta x)^2 - ax - a\delta x + b$$

$$\delta y = 2x\delta x + (\delta x)^2 - a\delta x$$

$$\frac{\delta y}{\delta x} = 2x + \delta x - a$$

$$\frac{dy}{dx} \approx \text{had}_{\delta x \rightarrow 0} 2x + \delta x - a / \lim_{\delta x \rightarrow 0} 2x + \delta x - a$$

$$\frac{dy}{dx} = 2x - a$$

$$(b) \quad \frac{dy}{dx} = 2 \text{ pada/at } (2, -3)$$

$$2(2) - a = 2$$

$$a = 2$$

Gantikan (2, -3) ke dalam  $y = x^2 - 2x + b$ ,

Substitute (2, -3) into  $y = x^2 - 2x + b$ ,

$$-3 = (2)^2 - 2(2) + b$$

$$b = -3$$

$$7 (a) \quad y = -x^{\frac{4}{3}}$$

$$\frac{dy}{dx} = -\frac{4x^{\frac{1}{3}}}{3}$$

$$= -\frac{4}{3}x^{\frac{1}{3}}$$

$$(b) \quad y = -2x^{-2}$$

$$\frac{dy}{dx} = 4x^{-3}$$

$$8 (a) \quad \frac{d}{dx}(2x^2 + 3x - 9) = 4x + 3$$

$$(b) \quad \frac{d}{dx}\left(x^2 + \frac{2}{x}\right) = \frac{d}{dx}(x^2 + 2x^{-1})$$

$$= 2x - 2x^{-2}$$

$$= 2x - \frac{2}{x^2}$$

$$(c) \quad \frac{d}{dx}\left(5x^3 + 2x^2 + 4x - 7 - \frac{1}{x} + \frac{3}{x^2}\right)$$

$$= \frac{d}{dx}(5x^3 + 2x^2 + 4x - 7 - x^{-1} + 3x^{-2})$$

$$= 15x^2 + 4x + 4 + x^{-2} - 6x^{-3}$$

$$= 15x^2 + 4x + 4 + \frac{1}{x^2} - \frac{6}{x^3}$$

$$9 (a) \quad f(x) = x^3 + 3x^2 - 5x - 15$$

$$f'(x) = 3x^2 + 6x - 5$$

$$(b) \quad f(x) = x^2 - 1 + 4x^{-1}$$

$$f'(x) = 2x - 4x^{-2}$$

$$(c) \quad f(x) = \frac{(x-2)(x+1)}{(x-2)}$$

$$= x + 1$$

$$f'(x) = 1$$

$$10 (a) \quad f'(x) = 7(2)(1 + 4x)^6 (4)$$

$$= 56(1 - 4x)^6$$

$$(b) \quad f(x) = 2(5x^2 - 3x)^{-10}$$

$$f'(x) = -20(5x^2 - 3x)^{-11} (10x - 3)$$

$$= \frac{-20(10x - 3)}{(5x^2 - 3x)^{11}}$$

$$11 (a) \quad y = 6x^2 [x(1 + 5x)]^3$$

$$= 6x^2(x^3)(1 + 5x)^3$$

$$= 6x^5(1 + 5x)^3$$

$$\frac{dy}{dx} = (1 + 5x)^3 \frac{d}{dx}(6x^5) + (6x^5) \frac{d}{dx}(1 + 5x)^3$$

$$= (1 + 5x)^3 (30x^4) + (6x^5)(3)(1 + 5x)^2 (5)$$

$$= 30x^4(1 + 5x)^2 [1 + 5x + 3x]$$

$$= 30x^4(1 + 5x)^2(1 + 8x)$$

$$(b) \quad \frac{dy}{dx} = (1 - 2x^2)^{10} \frac{d}{dx}(4x^2 - 3x) + (4x^2 - 3x) \frac{d}{dx}(1 - 2x^2)^{10}$$

$$= (1 - 2x^2)^{10} (8x - 3) + (4x^2 - 3x)(10)(1 - 2x^2)^9 (-4x)$$

$$= (1 - 2x^2)^9 [(1 - 2x^2)(8x - 3) - 40x(4x^2 - 3x)]$$

$$= (1 - 2x^2)^9 [8x - 3 - 16x^3 + 6x^2 - 160x^3 + 120x^2]$$

$$= (1 - 2x^2)^9 (8x - 3 - 176x^3 + 126x^2)$$

$$12 (a) \quad \frac{dy}{dx} = \frac{(2x+1) \frac{d}{dx}(x-2) - (x-2) \frac{d}{dx}(2x+1)}{(2x+1)^2}$$

$$= \frac{(2x+1)(1) - (x-2)(2)}{(2x+1)^2}$$

$$= \frac{2x+1-2x+4}{(2x+1)^2}$$

$$= \frac{5}{(2x+1)^2}$$

$$(b) \quad \frac{dy}{dx} = \frac{(2x-1)^2 \frac{d}{dx}(x^3) - (x^3) \frac{d}{dx}(2x-1)^2}{[(2x-1)^2]^2}$$

$$\begin{aligned}
 &= \frac{(2x-1)^2(3x^2) - (x^3)(2)(2x-1)(2)}{(2x-1)^4} \\
 &= \frac{x^2(2x-1)[3(2x-1) - (4x)]}{(2x-1)^4} \\
 &= \frac{x^2(6x-3-4x)}{(2x-1)^3} \\
 &= \frac{x^2(2x-3)}{(2x-1)^3}
 \end{aligned}$$

$$13 \quad y = \frac{2x-3}{x^2+1}$$

$$x^2+1 > 0, 2x-3 > 0$$

$$x > \frac{3}{2}$$

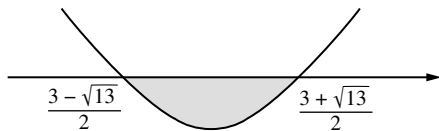
$$\begin{aligned}
 \frac{dy}{dx} &= \frac{(x^2+1)(2) - (2x-3)(2x)}{(x^2+1)^2} \\
 &= \frac{2x^2+2-4x^2+6x}{(x^2+1)^2} \\
 &= \frac{2+6x-4x^2}{(x^2+1)^2} \\
 &= \frac{-2(x^2-3x-1)}{(x^2+1)^2}
 \end{aligned}$$

$$\frac{dy}{dx} > 0 \quad (x^2+1) > 0, -2(x^2-3x-1) > 0$$

$$x^2-3x-1 < 0$$

$$x = \frac{-(-3) \pm \sqrt{(-3)^2 - 4(1)(-1)}}{2(1)}$$

$$= \frac{3 \pm \sqrt{13}}{2}$$



$$\frac{3 - \sqrt{13}}{2} < x < \frac{3 + \sqrt{13}}{2}$$

$$\therefore \frac{3}{2} < x < \frac{3 + \sqrt{13}}{2}$$

$$14 \quad y = 5(x-4) - 2(x-4)^2$$

$$= 5x - 20 - 2(x-4)^2$$

$$\frac{dy}{dx} = 5 - 2(2)(x-4)(1)$$

$$= 5 - 4(x-4)$$

$$x = 2, \frac{dy}{dx} = 5 - 4(2-4)$$

$$= 13$$

$$15 \quad \frac{d}{dx}(ax^m + bx^n) = 12x^s + 9x^t$$

$$am(x^{m-1}) + bn(x^{n-1}) = 12x^s + 9x^t$$

$$am = 12, bn = 9, s = m-1, t = n-1$$

$$(a) \quad \frac{s}{t} = \frac{m-1}{n-1}$$

$$= \frac{\frac{12}{a} - 1}{\frac{9}{b} - 1}$$

$$\begin{aligned}
 &= \frac{12-a}{9-b} \\
 &= \frac{a}{9-b} \\
 &= \frac{b(12-a)}{a(9-b)}
 \end{aligned}$$

$$(b) \quad \frac{s}{t} = \frac{5}{3} \qquad \frac{m}{n} = \frac{3}{2}$$

$$\frac{b(12-a)}{a(9-b)} = \frac{5}{3}$$

$$2m = 3n$$

$$36b - 3ab = 45a - 5ab \qquad 2\left(\frac{12}{a}\right) = 3\left(\frac{9}{b}\right)$$

$$36b + 2ab = 45a \dots \textcircled{1} \qquad b = \frac{9}{8}a \dots \textcircled{2}$$

Gantikan  $\textcircled{2}$  ke dalam  $\textcircled{1}$ /Substitute  $\textcircled{2}$  into  $\textcircled{1}$ ,

$$36\left(\frac{9}{8}a\right) + 2a\left(\frac{9}{8}a\right) = 45a$$

$$36a + 2a^2 - 40a = 0$$

$$2a^2 - 4a = 0$$

$$2a(a-2) = 0$$

$$a = 2(a > 0)$$

$$b = \frac{9}{8}(2)$$

$$= \frac{9}{4}$$

$$(c) \quad m = \frac{12}{2}$$

$$= 6$$

$$n = 9 \div \frac{9}{4}$$

$$= 4$$

$$s = 6 - 1$$

$$= 5$$

$$t = 4 - 1$$

$$= 3$$

$$16 \quad (a) \quad \frac{dy}{dx} = 12x^2 - 7x^{-2}$$

$$\frac{d^2y}{dx^2} = 24x + 14x^{-3}$$

$$(b) \quad \frac{dy}{dx} = 3(-2)(x^2+1)^{-3}(2x) = \frac{-12x}{(x^2+1)^3}$$

$$\frac{d^2y}{dx^2} = \frac{(x^2+1)^3 \frac{d}{dx}(-12x) - (-12x) \frac{d}{dx}(x^2+1)^3}{[(x^2+1)^3]^2}$$

$$= \frac{(x^2+1)^3(-12) - (-12x)(3)(x^2+1)^2(2x)}{(x^2+1)^6}$$

$$= \frac{(-12)(x^2+1)^2[x^2+1-6x^2]}{(x^2+1)^6}$$

$$= \frac{-12(1-5x^2)}{(x^2+1)^4}$$

$$17 \quad \frac{d}{dx}\left(\frac{x^4}{12} - x^3 + \frac{9}{2}x^2 + 6x - 3\right) = \frac{x^3}{3} - 3x^2 + 9x + 6$$

$$\frac{d}{dx}\left(\frac{x^3}{3} - 3x^2 + 9x + 6\right) = x^2 - 6x + 9$$

$$\frac{d^2}{dx^2}\left(\frac{x^4}{12} - x^3 + \frac{9}{2}x^2 + 6x - 3\right)$$

$$= x^2 - 6x + 9$$

$$= (x-3)^2$$

Terbukti bahawa sentiasa positif bagi semua nilai  $x$   
Proven that always positive for all the values of  $x$

$$18 \quad f'(x) = 2x^3 + 3px^2 + 3x - 16, \qquad f''(x) = 0$$

$$6x^2 + 6px + 3 = 0$$

$$2x^2 + 2px + 1 = 0$$

Sekurang-kurangnya satu penyelesaian nyata

At least one real solution

$$b^2 - 4ac \geq 0$$

$$(2p)^2 - 4(2)(1) \geq 0$$

$$4p^2 - 8 \geq 0$$

$$p^2 - 2 \geq 0$$

$$(p + \sqrt{2})(p - \sqrt{2}) \geq 0$$

$$\therefore p \leq -\sqrt{2} \quad \text{atau/or} \quad p \geq \sqrt{2}$$

$$19 \text{ (a) } m_t = \frac{dy}{dx}$$

$$= 4 + 8x^{-2}$$

$$m_{t_{x=4}} = 4 + \frac{8}{4^2}$$

$$= 4.5$$

$$(b) m_t = \frac{(3-2x)\frac{d}{dx}(4-3x^2) - (4-3x^2)\frac{d}{dx}(3-2x)}{(3-2x)^2}$$

$$= \frac{(3-2x)(-6x) - (4-3x^2)(-2)}{(3-2x)^2}$$

$$m_{t_{x=2}} = \frac{[(3-2(2))(-6)(2) - (4-3(2)^2)(-2)]}{[3-2(2)]^2}$$

$$= -4$$

$$20 \text{ (a) } m_t = \frac{dy}{dx}$$

$$= 6x^2 - 6x$$

$$m_{t_{x=1}} = 6(1)^2 - 6(1)$$

$$= 0$$

$$(b) m_t = \frac{dy}{dx}$$

$$8 = x^2 + 2x$$

$$x^2 + 2x - 8 = 0$$

$$(x+4)(x-2) = 0$$

$$x = -4, 2$$

$$y = \frac{(-4)^3}{3} + (-4)^2 - 1 \quad \text{atau/or} \quad y = \frac{2^3}{3} + 2^2 - 1$$

$$= -\frac{19}{3}$$

$$= \frac{17}{3}$$

$$\text{Koordinat/Coordinates: } \left(-4, -\frac{19}{3}\right), \left(2, \frac{17}{3}\right)$$

$$(c) \frac{dy}{dx} = 2ax + b$$

$$m_{t_{x=2}} = 5$$

$$4a + b = 5 \dots \textcircled{1}$$

$$\textcircled{1} - \textcircled{2}: 10a = 5$$

$$a = \frac{1}{2}$$

$$b = 5 - 4\left(\frac{1}{2}\right)$$

$$= 3$$

$$21 \text{ (a) (i) } m_t = \frac{dy}{dx} = 1 + 8x^{-2}$$

$$x = 2, y = 2 + 2 - \frac{8}{2} = 0$$

Pada titik (2, 0)/At point (2, 0),

$$m_t = 1 + \frac{8}{2^2} = 3$$

$$m_n = -\frac{1}{3}$$

Persamaan tangen/Equation of tangent:

$$y - 0 = 3(x - 2)$$

$$y = 3x - 6$$

Persamaan normal/Equation of normal:

$$y - 0 = -\frac{1}{3}(x - 2)$$

$$3y = -x + 2$$

$$x + 3y - 2 = 0$$

$$(ii) y = 2 + x - \frac{8}{x} \dots \textcircled{1}$$

$$x + 3y - 2 = 0 \dots \textcircled{2}$$

Gantikan  $\textcircled{1}$  ke dalam  $\textcircled{2}$ /Substitute  $\textcircled{1}$  into  $\textcircled{2}$ ,

$$x + 3\left(2 + x - \frac{8}{x}\right) - 2 = 0$$

$$x^2 + 6x + 3x^2 - 24 - 2x = 0$$

$$4x^2 + 4x - 24 = 0$$

$$x^2 + x - 6 = 0$$

$$(x+3)(x-2) = 0$$

$$x = -3, 2$$

$$x = -3, \quad -3 + 3y - 2 = 0$$

$$y = \frac{5}{3}$$

Normal menyilang lengkung itu sekali lagi pada

titik  $\left(-3, \frac{5}{3}\right)$ .

The normal intersects the curve again at point

$\left(-3, \frac{5}{3}\right)$ .

$$(b) m_t = \frac{dy}{dx}$$

$$= 2ax + b$$

$$m_{t_{x=4}} = 2a(4) + b$$

$$= 8a + b$$

$$m_{AB} = \frac{0-1}{12-4}$$

$$= -\frac{1}{8}$$

$$m_{t_{x=4}} \times m_{AB} = -1$$

$$8a + b = 8 \dots \textcircled{1}$$

$$\textcircled{1} - \textcircled{2}: 4a = 6$$

$$a = \frac{3}{2}$$

$$\text{Daripada/From } \textcircled{1}: b = 8 - 8\left(\frac{3}{2}\right) = -4$$

$$22 \text{ (a) } m_t = 0$$





$$10x - 2 = 0$$

$$x = \frac{1}{5}$$

$$y = 5\left(\frac{1}{5}\right)^2 - 2\left(\frac{1}{5}\right) + 1 = \frac{4}{5}$$

Titik pusingan/Turning point =  $\left(\frac{1}{5}, \frac{4}{5}\right)$

(i)

$x$	0	$\frac{1}{5}$	$\frac{2}{5}$
$\frac{dy}{dx}$	-2	0	2
Lakaran tangen Sketch of the tangent			
Lakaran graf Sketch of the graph			

$\therefore \left(\frac{1}{5}, \frac{4}{5}\right)$  ialah titik minimum/*is a minimum point*

(ii)  $\frac{dy}{dx} = 10x - 2$

$\frac{d^2y}{dx^2} = 10 > 0$

$\therefore \left(\frac{1}{5}, \frac{4}{5}\right)$  ialah titik minimum/*is a minimum point*



(b)  $y = \frac{x^2}{x+1}$

$\frac{dy}{dx} = \frac{(x+1)\frac{d}{dx}(x^2) - (x^2)\frac{d}{dx}(x+1)}{(x+1)^2}$

$= \frac{(x+1)(2x) - (x^2)(1)}{(x+1)^2}$

$= \frac{2x^2 + 2x - x^2}{(x+1)^2}$

$= \frac{x^2 + 2x}{(x+1)^2}$

$\frac{x^2 + 2x}{(x+1)^2} = 0$









$x+1 \neq 0, x(x+2) = 0$

$x = 0$  atau/or  $x = -2$

$y = \frac{(0)^2}{(0)+1} = 0$        $y = \frac{(-2)^2}{(-2)+1} = -4$

Titik pusingan/*Turning points* = (0, 0), (-2, -4)

(i)

$x$	-3	-2	-1.5	-0.5	0	1
$\frac{dy}{dx}$	0.75	0	-3	-3	0	0.75
Lakaran tangen Sketch of the tangent						
Lakaran graf Sketch of the graph						

$\therefore (-2, -4)$  ialah titik maksimum

$(-2, -4)$  is a maximum point

(0, 0) ialah titik minimum/*is a minimum point*

(ii)  $\frac{dy}{dx} = \frac{x^2 + 2x}{(x+1)^2}$

$\frac{d^2y}{dx^2} = \frac{(x+1)^2 \frac{d}{dx}(x^2 + 2x) - (x^2 + 2x) \frac{d}{dx}(x+1)^2}{[(x+1)^2]^2}$

$= \frac{(x+1)^2(2x+2) - (x^2+2x)(2)(x+1)(1)}{(x+1)^4}$

Apabila/*When*  $x = 0$ ,

$\frac{d^2y}{dx^2} = \frac{(0+1)^2(0+2) - (0+0)(2)(0+1)(1)}{(0+1)^4}$   
 $= 2 > 0$

$\therefore (0, 0)$  ialah titik minimum/*is a minimum point*

Apabila/*When*  $x = -2$ ,

$\frac{d^2y}{dx^2} = \frac{(-2+1)^2(-4+2) - ((-2)^2 + 2(-2))(2)(-2+1)(1)}{(-2+1)^4} = -2 < 0$

$\therefore (-2, -4)$  ialah titik maksimum

$(-2, -4)$  is a maximum point

$= -\frac{2}{3} < 0$

(c)  $y = 7 - x^3$

$\frac{dy}{dx} = -3x^2$

$-3x^2 = 0$





$x = 0$

$y = 7 - (0)^3$

$= 7$

Titik pusingan/*Turning point* = (0, 7)

(i)

$x$	-1	0	1
$\frac{dy}{dx}$	-3	0	-3
Lakaran tangen Sketch of the tangent			
Lakaran graf Sketch of the graph			

$\therefore (0, 7)$  ialah titik lengkok balas

$(0, 7)$  is an inflection point

(ii)  $\frac{dy}{dx} = -3x^2$

$\frac{d^2y}{dx^2} = -6x$

Apabila/*When*  $x = 0$ ,  $\frac{d^2y}{dx^2} = 0$

$\therefore (0, 7)$  ialah titik lengkok balas

$(0, 7)$  is an inflection point

23 (a)  $r = x$

$V = \pi r^2 h$

$= \pi x^2(45 - 5x)$

$= 45\pi x^2 - 5\pi x^3$

$V$  adalah maksimum apabila/*is maximum when*

$\frac{dV}{dx} = 0$

$90\pi x - 15\pi x^2 = 0$

$15\pi x(6 - x) = 0$

$15\pi x \neq 0, x = 6$

$\frac{d^2V}{dx^2} = 90\pi - 30\pi x$

$x = 6, \frac{d^2V}{dx^2} = 90\pi - 30\pi(6)$

$= -90\pi < 0$

$x = 6$  menjadikan isi padu silinder yang dikeluarkan adalah maksimum.

$x = 6$  makes the volume of the cylinder taken out a maximum.

(b)  $b = \sqrt{40 - h^2}$

$$A = h(40 - h^2)^{\frac{1}{2}}$$

Titik pegun wujud apabila

Stationary point exists when

$$\frac{dA}{dx} = 0$$

$$(40 - h^2)^{\frac{1}{2}} \frac{d}{dh}(h) + (h) \frac{d}{dh}(40 - h^2)^{\frac{1}{2}} = 0$$

$$(40 - h^2)^{\frac{1}{2}} + \frac{h(-2h)}{2(40 - h^2)^{\frac{1}{2}}} = 0$$

$$\frac{40 - h^2 - h^2}{(40 - h^2)^{\frac{1}{2}}} = 0$$





$$(40 - h^2)^{\frac{1}{2}} \neq 0, 40 - 2h^2 = 0$$

$$2h^2 = 40$$

$$h = \sqrt{20} (h > 0)$$

$$b = \sqrt{40 - \sqrt{20}^2} = \sqrt{20}$$

$$A = \sqrt{20} \times \sqrt{20} = 20$$

$h$	4	$\sqrt{20}$	5
$\frac{dA}{dx}$	1.63	0	-2.58
Lakaran tangen Sketch of the tangent			
Lakaran graf Sketch of the graph			

$\therefore A = 20$  ialah nilai maksimum/is a maximum value

(c)  $3x + 4y = 120$

$$y = \frac{120 - 3x}{4}$$

Biar  $h$  mewakili tinggi segi tiga itu.

Let  $h$  represents the height of the triangle.

$$h = \sqrt{x^2 - \left(\frac{x}{2}\right)^2} = \frac{\sqrt{3}x}{2}$$

$$A = A_{\Delta} + A_{\square}$$

$$= \frac{1}{2}(x)\left(\frac{\sqrt{3}x}{2}\right) + y^2$$

$$= \frac{\sqrt{3}x^2}{4} + \left(\frac{120 - 3x}{4}\right)^2$$

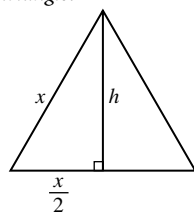
$$= \frac{4\sqrt{3}x^2 + [3(40 - x)]^2}{16}$$

$$= \frac{4\sqrt{3}x^2 + 9(40 - x)^2}{16}$$

$$= \frac{9(40 - x)^2 + 4\sqrt{3}x^2}{16} \text{ (Tertunjuk/Shown)}$$

$A$  pegun apabila/ $A$  is stationary when

$$\frac{dA}{dx} = 0$$



$$\frac{18(40 - x)(-1) + 8\sqrt{3}x}{16} = 0$$

$$\frac{18x - 720 + 8\sqrt{3}x}{16} = 0$$

$$18x - 720 + 8\sqrt{3}x = 0$$

$$(18 + 8\sqrt{3})x = 720$$

$$x = 22.6$$

$$\frac{d^2A}{dx^2} = \frac{18 + 8\sqrt{3}}{16}$$

$$= 1.991 > 0$$

$\therefore A$  adalah minimum apabila/ $A$  is minimum when  $x = 22.6$

24 (a)  $\frac{dA}{dr} = 2\pi(-18r^{-2} + \frac{2r}{3}), \frac{dA}{dt} = 2.1\pi \text{ cm}^2 \text{ s}^{-1}$

$$r = 6 \text{ cm}, \frac{dA}{dr} = 2\pi\left(-\frac{18}{(6)^2} + \frac{2(6)}{3}\right) = 7\pi$$

$$\frac{dr}{dt} = \frac{dr}{dA} \times \frac{dA}{dt} = \frac{1}{7\pi} \times (2.1\pi) = 0.3 \text{ cm s}^{-1}$$

(b)  $\frac{dA}{dt} = 6 \text{ cm}^2 \text{ s}^{-1}, r = 5 \text{ cm}$

(i)  $A = 4\pi r^2$

$$\frac{dA}{dr} = 8\pi r$$

$$\frac{dr}{dt} = \frac{dr}{dA} \times \frac{dA}{dt}$$

$$\frac{dr}{dt} = \frac{1}{8\pi(5)} \times 6$$

$$= \frac{3}{20\pi} \text{ cm s}^{-1}$$

(ii)  $V = \frac{4}{3}\pi r^3$

$$\frac{dV}{dr} = 4\pi r^2$$

$$\frac{dV}{dt} = \frac{dV}{dA} \times \frac{dA}{dt}$$

$$= \frac{dV}{dr} \times \frac{dr}{dA} \times \frac{dA}{dt}$$

$$\frac{dV}{dr} = 4\pi(5)^2 \times \frac{3}{20\pi}$$

$$= 15 \text{ cm}^3 \text{ s}^{-1}$$

25 (a)  $\frac{dL}{dm} = \frac{dL}{dx} \times \frac{dx}{dm}$

$$= (4 - 2x) \times \left(\frac{1}{6}\right)$$

$$= \frac{2 - x}{3}$$

$$\delta L = 0.4$$

$$\frac{\delta L}{\delta m} \approx \frac{dL}{dm}$$

$$\delta m \approx \frac{dm}{dL} \times \delta L$$

$$= \frac{3}{2 - x} \times 0.4$$

$$x = 1, \delta m = 1.2$$

$$(b) \frac{dy}{dx} = -\frac{36}{(2x-5)^3}$$

(i) Apabila/When  $x = 3$ ,

$$\delta x = p$$

$$\frac{\delta y}{\delta x} \approx \frac{dy}{dx}$$

$$\delta y = \frac{-36}{[2(3)-5]^3} \times p \\ = -36p$$

(ii) Apabila/When  $y = 1$ ,

$$\frac{9}{(2x-5)^2} = 1$$

$$(2x-5)^2 = 9$$

$$2x-5 = \pm 3$$

$$x = 1, 4$$

$$\delta y = -p$$

$$\frac{\delta y}{\delta x} \approx \frac{dy}{dx}$$

$$\frac{-p}{\delta x} \approx \frac{-36}{[2(1)-5]^3} \quad \text{atau/or} \quad \frac{-p}{\delta x} \approx \frac{-36}{[2(4)-5]^3}$$

$$\frac{-p}{\delta x} \approx \frac{4}{3} \quad \frac{-p}{\delta x} \approx -\frac{4}{3}$$

$$\delta x \approx \pm \frac{3}{4} p$$

$$(c) \frac{dy}{dx} = 4x^3$$

(i)  $x = 2, \delta x = 0.03$

$$\frac{\delta y}{\delta x} \approx \frac{dy}{dx}$$

$$\delta y \approx 4(2)^3 \times 0.03 \\ = 0.96$$

$$y_n = y_o + \delta y$$

$$2.03^4 = 2^4 + 0.96$$

$$= 16.96$$

(ii)  $x = 2, \delta x = -0.01$

$$\frac{\delta y}{\delta x} \approx \frac{dy}{dx}$$

$$\delta y \approx 4(2)^3 \times (-0.01) \\ = -0.32$$

$$y_n = y_o + \delta y$$

$$1.99^4 = 2^4 - 0.32$$

$$= 15.68$$

### Praktis Sumatif

#### Kertas 1

$$1 \quad \delta y = 4x \delta x + 2(\delta x)^2 + 3\delta x$$

$$\frac{\delta y}{\delta x} = 4x + 2\delta x + 3$$

$$\frac{dy}{dx} \approx \lim_{\delta x \rightarrow 0} 4x + 2\delta x + 3 / \lim_{\delta x \rightarrow 0} 4x + 2\delta x + 33 \\ = 4x + 3$$

Apabila/When  $x = 2$ ,

$$\frac{dy}{dx} = 4(2) + 3 = 11$$

2  $f'(x_a) = f'(x_b) = f'(x_c) = 0 \rightarrow A, B, C$  ialah titik pusingan  
A, B, C are turning points

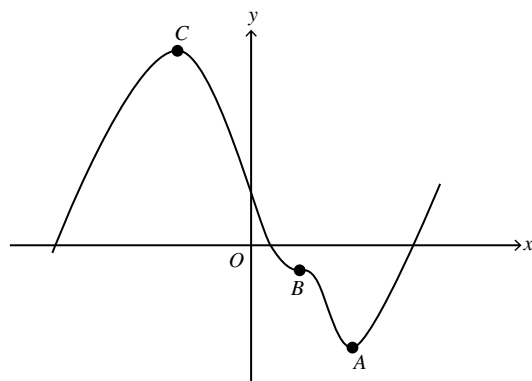
$$f''(x_b) = 0 \rightarrow B \text{ ialah titik lengkok balas}$$

B is an inflection point

$$f''(x_c) < f''(x_b) < f''(x_a) \rightarrow C \text{ ialah titik maksimum}$$

dan A ialah titik minimum.

C is a maximum point and A is a minimum point.



(Terima semua graf yang berbentuk serupa seperti di atas tanpa mengambil kira kedudukan graf.)

(Accept all graphs that have the similar shape regardless its position.)

$$3 \quad (a) \quad \lim_{x \rightarrow 3} \frac{x-3}{4-\sqrt{19-x}} / \lim_{x \rightarrow 3} \frac{x-3}{4-\sqrt{19-x}} \\ = \lim_{x \rightarrow 3} \frac{(x-3)(4+\sqrt{19-x})}{16-(19-x)} / \lim_{x \rightarrow 3} \frac{(x-3)(4+\sqrt{19-x})}{16-(19-x)} \\ = \lim_{x \rightarrow 3} \frac{(x-3)(4+\sqrt{19-x})}{x-3} / \lim_{x \rightarrow 3} \frac{(x-3)(4+\sqrt{19-x})}{x-3} \\ = \lim_{x \rightarrow 3} 4 + \sqrt{19-x} / \lim_{x \rightarrow 3} 4 + \sqrt{19-x} \\ = 4 + \sqrt{19-3} \\ = 8$$

$$(b) \quad y = 5x^0 \\ \frac{dy}{dx} = 0(5x^{-1}) \\ \therefore k = 0, m = -1$$

$$4 \quad \frac{dy}{dx} = 4x + 7$$

$$4x + 7 = 5$$

$$x = -\frac{1}{2}$$

$$y = 2\left(-\frac{1}{2}\right)^2 + 7\left(-\frac{1}{2}\right) - 1$$

$$= -4$$

$$\therefore \text{Koordinat/Coordinates} = \left(-\frac{1}{2}, -4\right)$$

$y = 5x + p$  merupakan tangen kepada lengkung pada

titik  $\left(-\frac{1}{2}, -4\right)$  kerana  $m_t = 5$ .

$y = 5x + p$  is the tangent to the curve at point  $\left(-\frac{1}{2}, -4\right)$  because  $m_t = 5$ .

$$\therefore y - (-4) = 5\left[x - \left(-\frac{1}{2}\right)\right]$$

$$\begin{aligned}
 y &= 5x + \frac{5}{2} - 4 \\
 &= 5x - \frac{3}{2} \\
 \therefore p &= -\frac{3}{2}
 \end{aligned}$$

### Kertas 2

1  $\frac{dy}{dx} = 6x^2 + 1$

$$\begin{aligned}
 x &= 2, \frac{dy}{dx} = 6(2)^2 + 1 \\
 &= 25
 \end{aligned}$$

$$\delta x = 0.02p \qquad \% \delta y = \frac{\delta y}{y} \times 100\%$$

$$\frac{\delta y}{\delta x} \approx \frac{dy}{dx} \qquad = \frac{0.5p}{2(2^3) + 2} \times 100\%$$

$$\delta y \approx \frac{dy}{dx} \times \delta x \qquad = \frac{25}{9} p\%$$

$$= 25 \times 0.02p$$

$$\delta y = 0.5p$$

2  $y_1 = y_2$

$$x^2 - x - 5 = x^2 - \frac{31}{5}x + \frac{53}{5}$$

$$5x^2 - 5x - 25 = 5x^2 - 31x + 53$$

$$26x = 78$$

$$x = 3$$

$$y = (3)^2 - (3) - 5$$

$$= 1$$

$$\therefore A(3, 1)$$

(a)  $m_{t_1} = \frac{dy_1}{dx}$

$$= 2x - 1$$

$$m_{t_2} = \frac{dy_2}{dx}$$

$$= 2x - \frac{31}{5}$$

(b) Pada/At  $x = 3$ ,

$$m_{t_1} = 2(3) - 1$$

$$= 5$$

$$m_{t_2} = 2(3) - \frac{31}{5}$$

$$= -\frac{1}{5}$$

$$m_{t_1} \times m_{t_2} = 5 \times -\frac{1}{5}$$

$$= -1$$

(Tertunjuk bahawa tangen kedua-dua lengkung itu ialah normal antara satu sama lain.)

(Shown that the tangents of both curves are normal to each other.)

3  $m_t = \frac{dy}{dx}$

$$= 2x + 2$$

$$x = 2, m_t = 2(2) + 2$$

$$= 6$$

$$\therefore m_n = -\frac{1}{6}$$

Persamaan normal/Equation of normal:

$$y - 3 = -\frac{1}{6}(x - 2)$$

$$y = -\frac{1}{6}x + \frac{1}{3} + 3$$

$$y = -\frac{1}{6}x + \frac{10}{3}$$

$$\therefore a = -\frac{1}{6}, b = \frac{10}{3}$$

4 Biar/Let  $y = x^{-\frac{1}{2}}$

$$\frac{dy}{dx} = -\frac{1}{2}x^{-\frac{3}{2}}$$

$$x = 9, y = (9)^{-\frac{1}{2}}$$

$$= \frac{1}{3}$$

$$\frac{dy}{dx} = -\frac{1}{2}(9)^{-\frac{3}{2}}$$

$$= -\frac{1}{54}$$

$$\delta x = 0.02, \frac{\delta y}{\delta x} \approx \frac{dy}{dx}$$

$$\delta y \approx \frac{dy}{dx} \times \delta x$$

$$= -\frac{1}{54} \times 0.02$$

$$\delta y = -\frac{1}{2700}$$

$$\therefore y_n = y_o + \delta y$$

$$(9.02)^{-\frac{1}{2}} = \frac{1}{3} - \frac{1}{2700}$$

$$= \frac{899}{2700}$$

5 PQ : PS : SR

$$= 2 : 5 : 3$$

$$= x : \frac{5x}{2} : \frac{3x}{2}$$

(a)  $A = \frac{1}{2} \left( x + \frac{3x}{2} \right) \left( \frac{5x}{2} \right)$

$$= \frac{25x^2}{8}$$

(b) (i)  $\frac{dx}{dt} = 0.02 \text{ cm s}^{-1}$

$$\frac{dA}{dt} = \frac{dA}{dx} \times \frac{dx}{dt}$$

$$= \frac{25x}{4} \times 0.02$$

$$= \frac{25(4)}{4} \times 0.02$$

$$= 0.5 \text{ cm}^2 \text{ s}^{-1}$$

(ii)  $\delta x = 0.05$ ,

$$\frac{\delta V}{\delta x} \approx \frac{dV}{dx}$$

$$\delta V \approx \frac{dV}{dx} \times \delta x$$

$$= \frac{15x^2}{4} \times 0.05$$

$$= \frac{15(4)^2}{4} \times 0.05$$

$$= 3 \text{ cm}^3$$

$$V = \frac{25x^2}{8} \times \frac{2}{5}x$$

$$= \frac{5x^3}{4}$$

$$\frac{dV}{dx} = \frac{15x^2}{4}$$



$$6 \text{ (a) } \theta = \frac{s}{r}$$

Dalam sebutan  $r$ /In terms of  $r$ ,

$$\theta = \frac{26 - 2r}{r}$$

$$(b) \frac{dr}{dt} = 0.1 \text{ cm s}^{-1}, r = 2 \text{ cm},$$

$$(i) \frac{d\theta}{dt} = \frac{d\theta}{dr} \times \frac{dr}{dt}$$

$$= \frac{r(-2) - (26 - 2r)(1)}{r^2} \times 0.1$$

$$= \frac{-2r - 26 + 2r}{r^2} \times 0.1$$

$$= \frac{-26}{(2)^2} \times 0.1$$

$$= -0.65 \text{ rad s}^{-1}$$

$$(ii) A = \frac{1}{2}r^2 \left( \frac{26 - 2r}{r} \right)$$

$$= \frac{26r - 2r^2}{2}$$

$$= 13r - r^2$$

$$\frac{dA}{dr} = 13 - 2r$$

$$\frac{dA}{dt} = \frac{dA}{dr} \times \frac{dr}{dt}$$

$$= [13 - 2(2)] \times 0.1$$

$$= 0.9 \text{ cm}^2 \text{ s}^{-1}$$

$$7 \text{ (a) } V = 2666\frac{2}{3}$$

$$2x^2h = \frac{8000}{3}$$

$$h = \frac{4000}{3x^2}$$

$$A = 2(2x^2 + xh + 2xh)$$

$$= 4x^2 + 6xh$$

$$= 4x^2 + 6x \left( \frac{4000}{3x^2} \right)$$

$$= 4x^2 + \left( \frac{8000}{x} \right)$$

A minimum apabila/is minimum when

$$\frac{dA}{dx} = 0$$

$$8x - \frac{8000}{x^2} = 0$$

$$8x^3 - 8000 = 0$$

$$x^3 = 1000$$

$$x = 10$$

$$h = \frac{4000}{3(10)^2}$$

$$= 13\frac{1}{3}$$

Dimensi kotak (panjang  $\times$  lebar  $\times$  tinggi)

Dimension of box (length  $\times$  width  $\times$  height)

$$= 20 \text{ cm} \times 10 \text{ cm} \times 13\frac{1}{3} \text{ cm}$$

(b) Kos pengeluaran/Production cost

$$= 20000 \times \left[ 4(10)^2 + \left( \frac{8000}{10} \right) \right] \times \text{RM}0.002$$

$$= \text{RM}48000$$

$$8 \text{ } V = \frac{1}{3}\pi r^2 h$$

$$= \frac{1}{3}\pi(12^2 - h^2)h$$

$$= \frac{1}{3}\pi(144 - h^2)h$$

$$= \frac{\pi}{3}(144h - h^3)$$

$V$  maksimum apabila/ $V$  is maximum when  $\frac{dV}{dh} = 0$ ,

$$\frac{\pi}{3}(144 - 3h^2) = 0$$

$$3h^2 = 144$$

$$h = \sqrt{48}$$

$$= 4\sqrt{3} \text{ cm}$$

$$r^2 = 144 - h^2$$

$$= 144 - 48$$

$$r = 4\sqrt{6} \text{ cm}$$

$$\sin 2\alpha = \frac{4\sqrt{3}}{12}$$

$$2\alpha = \sin^{-1} \frac{\sqrt{3}}{3}$$

$$= 35.26^\circ$$

$$\alpha = 17.63^\circ$$

$$\tan 17.63^\circ = \frac{j}{4\sqrt{6}}$$

$$j = 3.114 \text{ cm}$$

